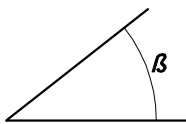
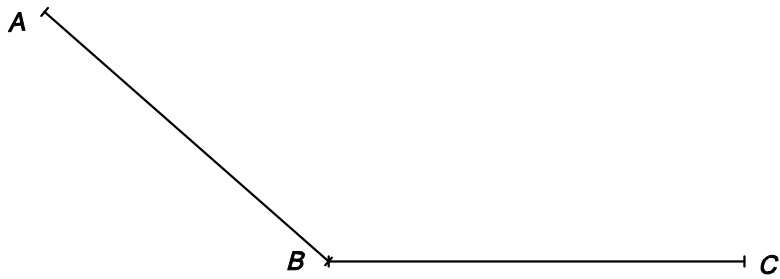

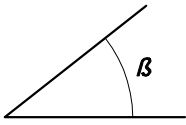



1- DETERMINACIÓ DE L'ARC CAPAÇ DE L'ANGLE DONAT SOBRE EL SEGMENT AB



2- DETERMINACIÓ DELS PUNTS DELS QUALS ES VEUEN DOS SEGMENTS SOTA UN ANGLE DONAT